

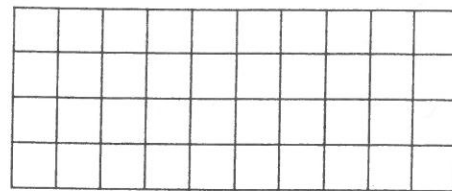
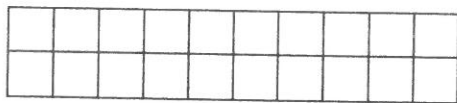


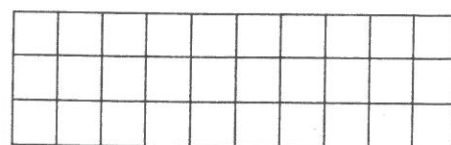
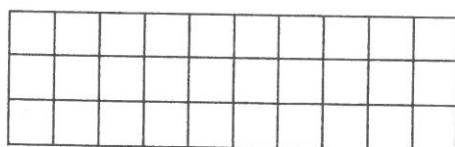


11. Počítejte po desítkách a ukazujte na číselné ose.



 12. Porovnejte.



 13. Porovnejte.

$40 \square 60$

$80 \square 80$

$20 \square 30$

$70 \square 50$

$30 \square 90$

$100 \square 90$

$10 \square 90$

$60 \square 30$

$10 \square 50$

$10 \square 100$

$50 \square 50$

$80 \square 70$